

Math Choice Board

<p>Number Riddles Read and solve the number riddles.</p>	<p>Addition Story Problems Write and solve four addition story problems.</p>	<p>Subtraction About Me Write a subtraction number sentence for each of the clues about you.</p>
<p>Doubles Book Illustrate a book that would help someone learn their doubles facts up to 20 (ex: 1+1, 2+2, etc.).</p>	<p>True or False Decide if the math statements are true or false, then circle your response.</p>	<p>Which One Doesn't Belong? Solve the "which one doesn't belong?" activities.</p>
<p>Subtraction Story Problems Write and solve four subtraction story problems.</p>	<p>Fact Families Create your own fact family house.</p>	<p>Least to Greatest Order the numbers from least to greatest.</p>
<p>Geometry Rule Find three shapes that follow the same "rule." Then draw another shape that fits your rule. What is the shape rule?</p>	<p>Addition About Me Write an addition number sentence for each of the clues about you.</p>	<p>Count and Exercise Do 20 of each exercise to get to 100...</p> <ul style="list-style-type: none">- 20 jumping jacks- 20 high knees- 20 toe touches- 20 windmill arms- 20 frog hops

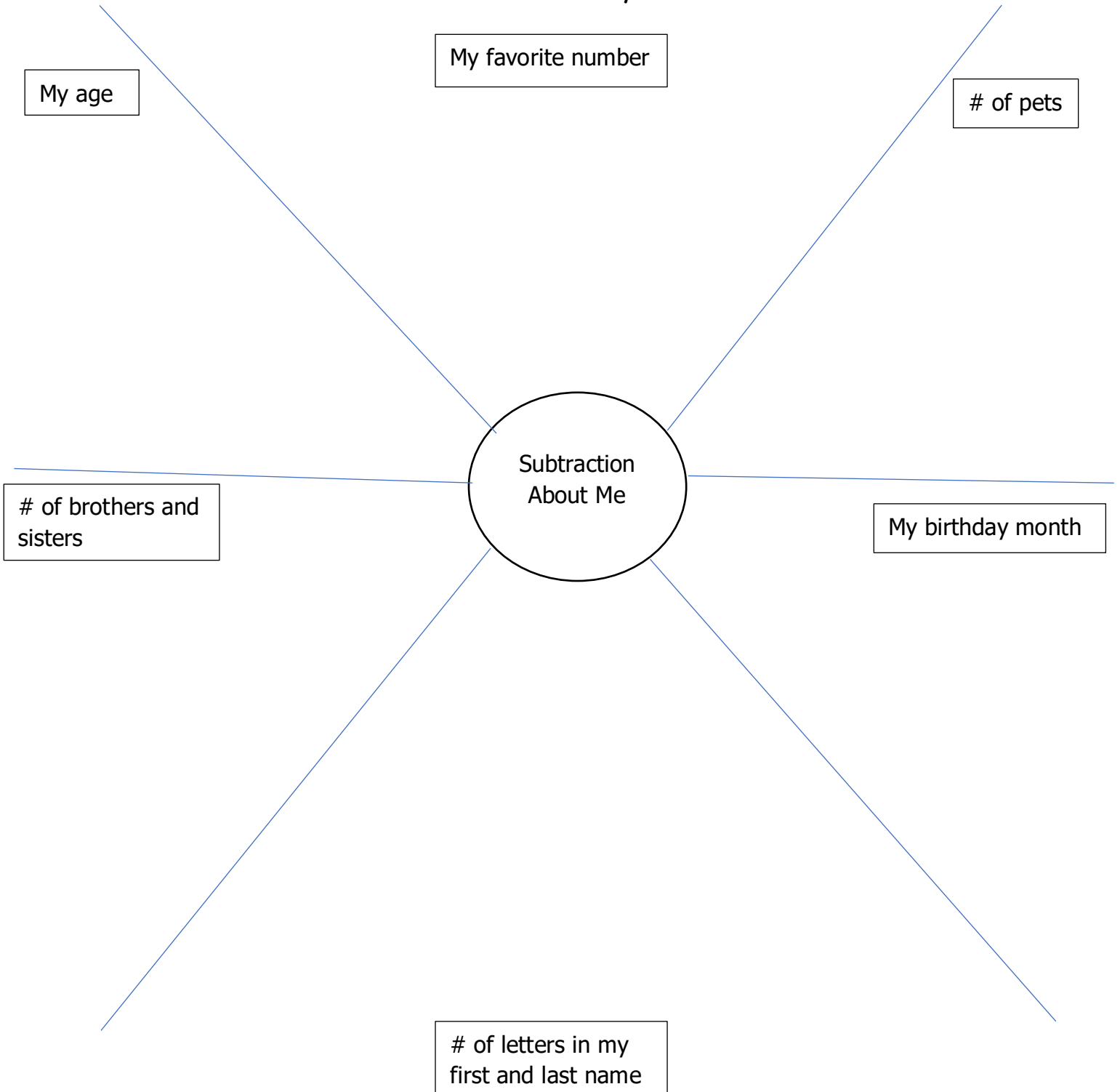
Number Riddles

Read and solve the number riddles.

<p>I am an odd number. You say me when skip counting by 5's. I am less than 25, but greater than 10. What number am I?</p>	
<p>I have 4 tens. I am an even number. I am less than 49, but greater than 46. What number am I?</p>	
<p>I am less than 5 tens. I am more than 3 tens. You say me when skip counting by 10's. What number am I?</p>	
<p>I am greater than 65 and less than 70. I have 8 ones. What number am I?</p>	
<p>I am the largest number you can make with these digits: 2, 1, 7</p>	

Subtraction About Me

Write a subtraction number sentence for each of the clues about you.



My age

My favorite number

of pets

Subtraction
About Me

of brothers and
sisters

My birthday month

of letters in my
first and last name

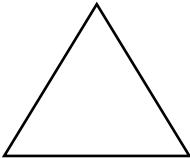

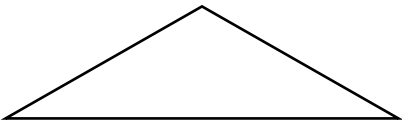
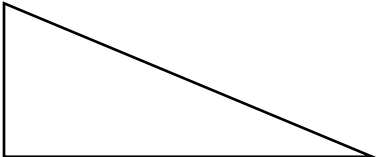
True or False

Decide if the math statements are true or false, then circle your response.

$6 + 13 = 18$	True False
Squares have 3 right angles.	True False
Jon has 14 books. He reads 9 books. Jon has 7 more books that he has not read yet.	True False
$20 - 5 = 16$	True False
Blue, blue, purple, green Blue, blue, blue, purple, green Blue, blue, blue, blue, purple, green This is an example of a growing pattern.	True False
Half past 4 is another way of saying 4:30.	True False

Which One Doesn't Belong?

Solve the "which one doesn't belong?" activities.

Handwriting practice lines consisting of four sets of three horizontal lines (top solid, middle dashed, bottom solid).

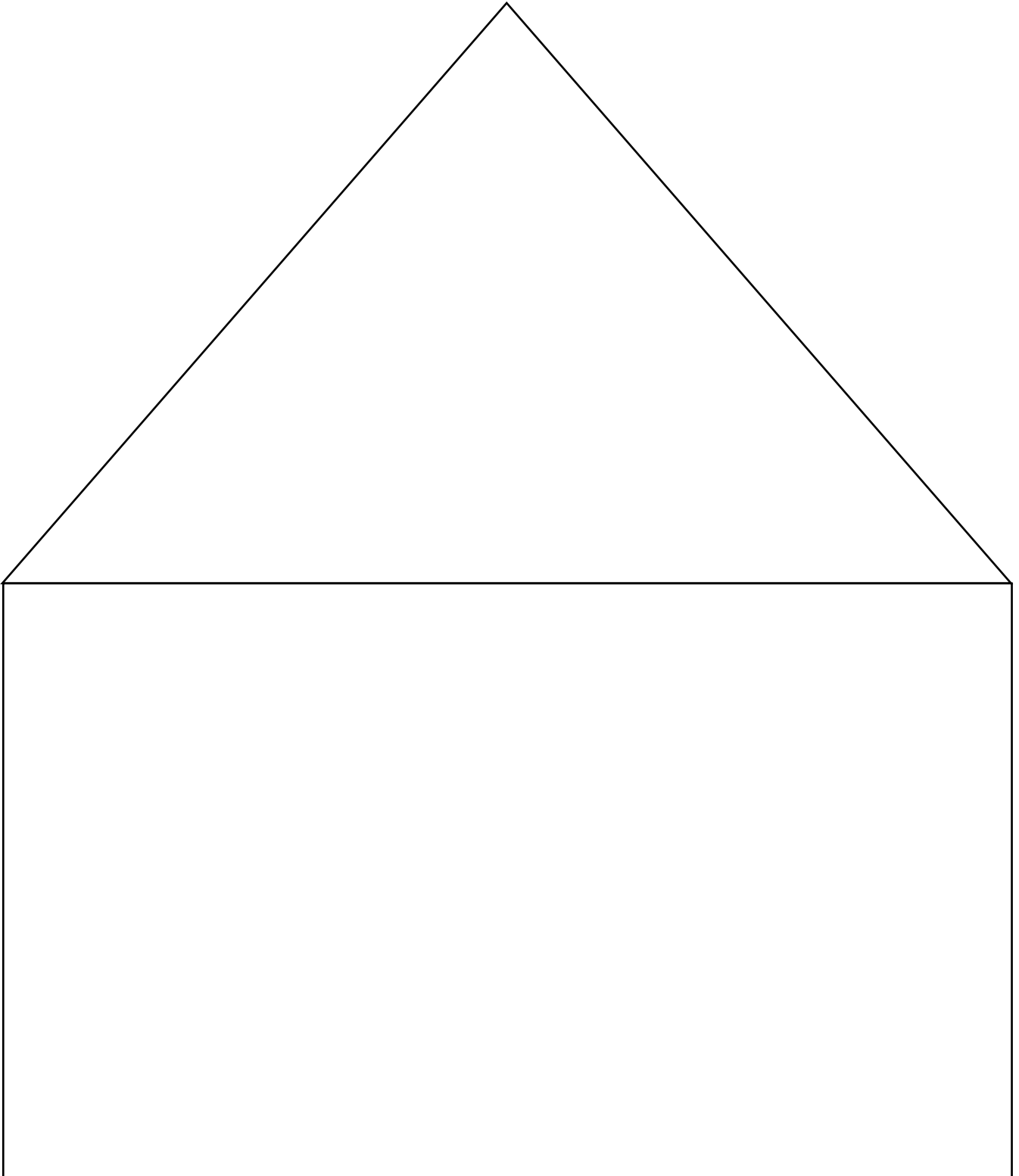
Solve the "which one doesn't belong?" activities.

34	16
25	72

Handwriting practice lines consisting of four sets of three horizontal lines (top solid, middle dashed, bottom solid).

Fact Families

Create your own fact family house.



Least to Greatest

Order the numbers from least to greatest.

12	3	100	78	9	55	13	32	87
----	---	-----	----	---	----	----	----	----

--	--	--	--	--	--	--	--	--

Greatest to Least

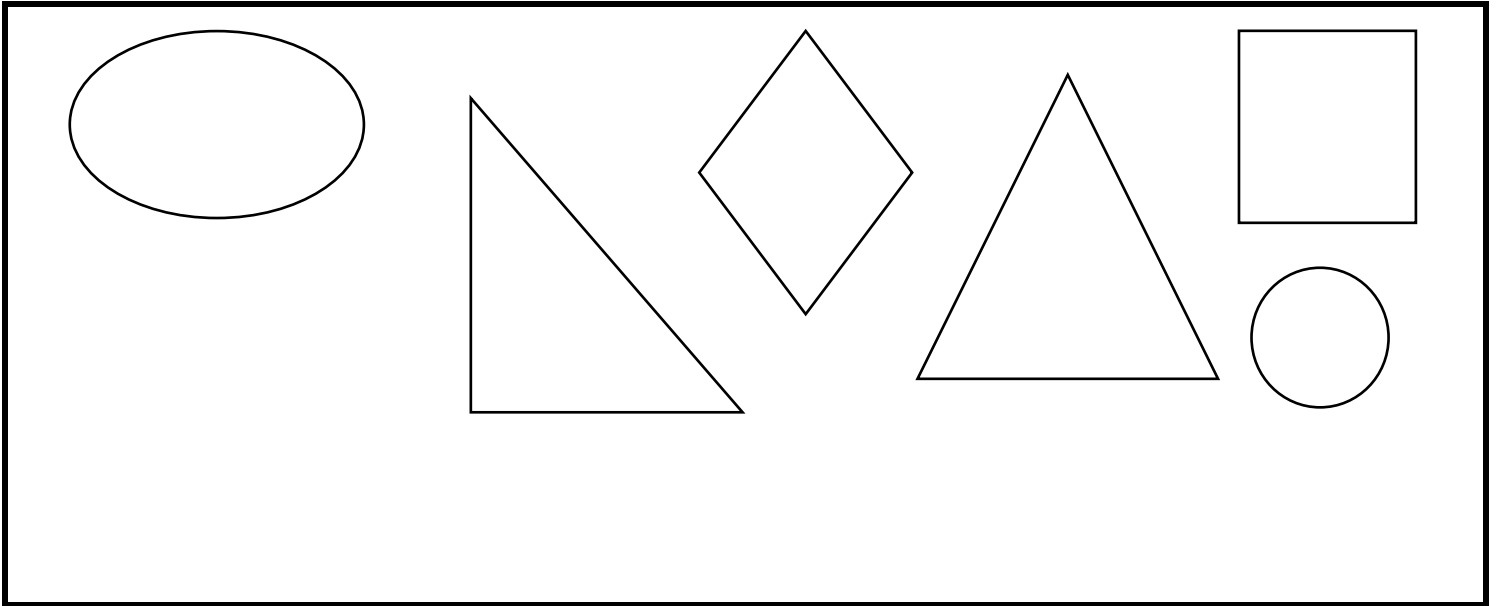
Order the numbers from greatest to least.

30	15	45	5	10	35	20	40	25
----	----	----	---	----	----	----	----	----

--	--	--	--	--	--	--	--	--

Geometry Rule

Find three shapes that follow the same "rule." Then draw another shape that fits your rule. What is the shape rule? Then, draw a shape that does not fit your shape rule.



Shape rule:

.....

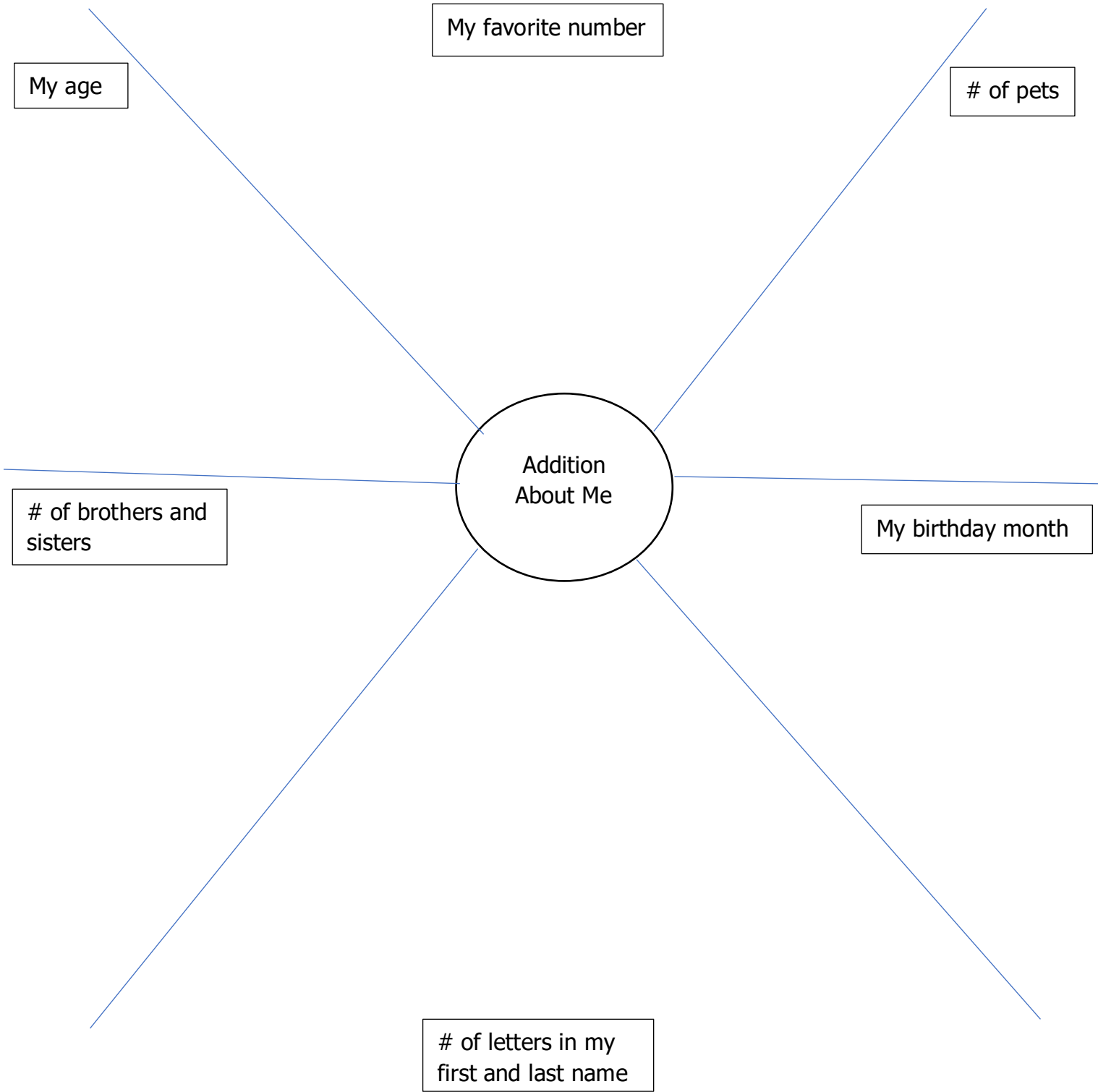
.....

.....

Shape that does not follow my rule:

Addition About Me

Write an addition number sentence for each of the clues about you.



My age

My favorite number

of pets

Addition
About Me

of brothers and
sisters

My birthday month

of letters in my
first and last name